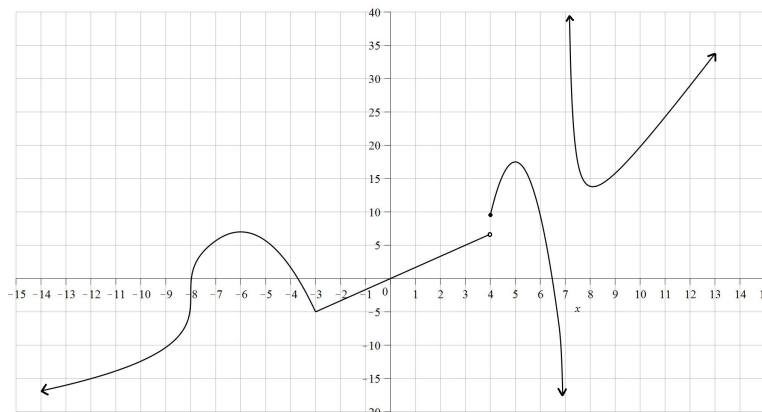


Worksheet for Week 4: Limits and Derivatives

This worksheet reviews limits and the definition of the derivative with graphs and computations.

1. Answer the following questions using the graph $y = f(x)$ below. The function $f(x)$ has domain all numbers except 7 as seen from the graph.



- (a) $\lim_{x \rightarrow 4} f(x) = \text{DNE}$
- (b) $\lim_{x \rightarrow 7^+} f(x) = \infty$
- (c) $f'(0) = \frac{5}{3}$
- (d) $\lim_{x \rightarrow -3} f(x) = -5$
- (e) $\lim_{x \rightarrow 0} \frac{f(x)}{x} = f'(0) = \frac{5}{3}$
- (f) $\lim_{h \rightarrow 0} \frac{f(3+h) - 5}{h} = f'(3) = \frac{5}{3}$
- (g) $f'(5) = 0$
- (h) $\lim_{h \rightarrow 0^+} \frac{f(-8+h) - f(-8)}{h} = \infty$
- (i) $\lim_{h \rightarrow 0} \frac{f(-8+h)}{h} = \infty$
- (j) $\lim_{h \rightarrow 0} \frac{f(-6+h) - f(-6)}{h} = f'(-6) = 0$
- (k) $\lim_{h \rightarrow 0^+} \frac{f(-3+h) + 5}{h} = \frac{5}{3}$
- (l) List all the intervals where the derivative $f'(x)$ is negative. $(-6, -3), (5, 7), (7, 8)$
- (m) List all the intervals where the derivative $f'(x)$ is decreasing. $(-8, -3), (4, 7)$
- (n) A critical value for $f(x)$ is any x in the domain of $f(x)$ where $f'(x) = 0$ or $f'(x)$ is undefined. List all critical values of $f(x)$.
 $x = -8, -6, -3, 4, 5, 8$

2. Evaluate the following limits and then match the functions with their graphs shown below using your limit results. Some will require you to compute left and right hand limits.

(a) $\lim_{x \rightarrow 5} \frac{1}{x - 5} =$

Solution:

$$\lim_{x \rightarrow 5^+} \frac{1}{x - 5} = \infty \quad \text{and} \quad \lim_{x \rightarrow 5^-} \frac{1}{x - 5} = -\infty$$

so the limit Does Not Exist.

(b) $\lim_{x \rightarrow 5} \frac{-x}{(x - 5)^2} =$

Solution:

$$\lim_{x \rightarrow 5} \frac{-x}{(x - 5)^2} = -\infty$$

(c) $\lim_{x \rightarrow 5} \frac{-x^2 - 2x + 35}{x^2 - 4x - 5} =$

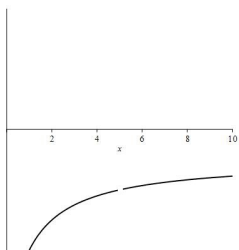
Solution:

$$\lim_{x \rightarrow 5} \frac{-x^2 - 2x + 35}{x^2 - 4x - 5} = \lim_{x \rightarrow 5} \frac{-(x - 5)(x + 7)}{(x - 5)(x + 1)} = \lim_{x \rightarrow 5} \frac{-(x + 7)}{x + 1} = \frac{-12}{6} = -2$$

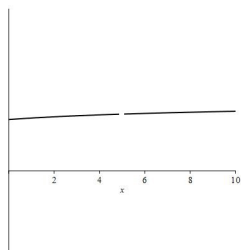
(d) $\lim_{x \rightarrow 5} \frac{x - \sqrt{3x + 10}}{x - 5} =$

Solution:

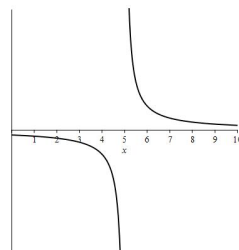
$$\begin{aligned} \lim_{x \rightarrow 5} \frac{x - \sqrt{3x + 10}}{x - 5} \cdot \frac{x + \sqrt{3x + 10}}{x + \sqrt{3x + 10}} &= \lim_{x \rightarrow 5} \frac{x^2 - 3x - 10}{(x - 5)(x + \sqrt{3x + 10})} \\ &= \lim_{x \rightarrow 5} \frac{(x - 5)(x + 2)}{(x - 5)(x + \sqrt{3x + 10})} = \lim_{x \rightarrow 5} \frac{x + 2}{x + \sqrt{3x + 10}} = \frac{7}{10} \end{aligned}$$



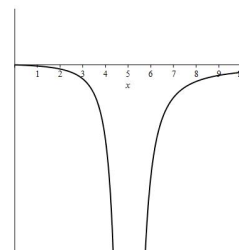
$$y = \frac{-x^2 - 2x + 35}{x^2 - 4x - 5}$$



$$y = \frac{x - \sqrt{3x + 10}}{x - 5}$$



$$y = \frac{1}{x - 5}$$



$$y = \frac{-x}{(x - 5)^2}$$

3. Use the definition of the derivative $f'(a) = \lim_{h \rightarrow 0} \frac{f(a+h) - f(a)}{h}$ to compute $f'(3)$ for the following functions. Then match the functions with their graphs shown below using your limit results.

(a) $f(x) = (x - 3)^{\frac{1}{3}} + 2$

Solution:

$$\lim_{h \rightarrow 0} \frac{f(3+h) - f(3)}{h} = \lim_{h \rightarrow 0} \frac{(3+h-3)^{1/3} + 2 - 2}{h} = \lim_{h \rightarrow 0} \frac{h^{1/3}}{h} = \lim_{h \rightarrow 0} \frac{1}{h^{2/3}} = \infty$$

so $f'(3)$ does not exist.

(b) $f(x) = (x - 3)^{\frac{2}{3}} + 2$

Solution:

$$\lim_{h \rightarrow 0} \frac{f(3+h) - f(3)}{h} = \lim_{h \rightarrow 0} \frac{(3+h-3)^{2/3} + 2 - 2}{h} = \lim_{h \rightarrow 0} \frac{h^{2/3}}{h} = \lim_{h \rightarrow 0} \frac{1}{h^{1/3}}$$

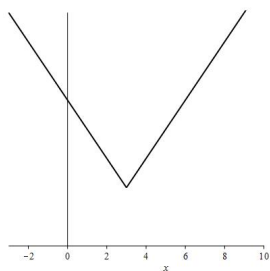
The limit does not exist because the left and right limits are $-\infty$ and ∞ , respectively. So $f'(3)$ does not exist.

(c) $f(x) = |x - 3| + 2$

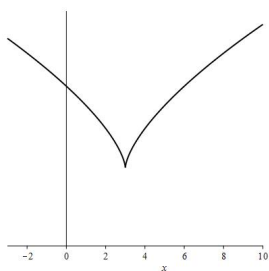
Solution:

$$\lim_{h \rightarrow 0} \frac{f(3+h) - f(3)}{h} = \lim_{h \rightarrow 0} \frac{|3+h-3| + 2 - 2}{h} = \lim_{h \rightarrow 0} \frac{|h|}{h}$$

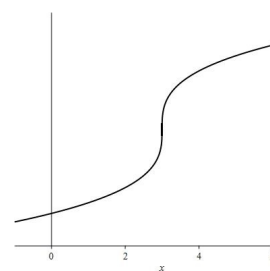
The limit does not exist because the left and right limits are -1 and 1 , respectively. So $f'(3)$ does not exist.



$$y = |x - 3| + 2$$



$$y = (x - 3)^{\frac{2}{3}} + 2$$



$$y = (x - 3)^{\frac{1}{3}} + 2$$

4. Find, if any, the horizontal asymptotes of the following functions and use that information to match them with their graphs on the next page. Each question should have two limit computations with $x \rightarrow \infty$ and $x \rightarrow -\infty$.

(a) $f(x) = \frac{(x+1)^4}{x^4 + 3x^2 + 7x + 10}$

Solution:

$$\begin{aligned} \lim_{x \rightarrow \infty} f(x) &= \lim_{x \rightarrow \infty} \frac{(x+1)^4}{x^4 + 3x^2 + 7x + 10} = \lim_{x \rightarrow \infty} \frac{\frac{(x+1)^4}{x^4}}{\frac{x^4 + 3x^2 + 7x + 10}{x^4}} \\ &= \lim_{x \rightarrow \infty} \frac{\left(\frac{x+1}{x}\right)^4}{\frac{x^4}{x^4} + \frac{3x^2}{x^4} + \frac{7x}{x^4} + \frac{10}{x^4}} = \lim_{x \rightarrow \infty} \frac{\left(1 + \frac{1}{x}\right)^4}{1 + \frac{3}{x^2} + \frac{7}{x^3} + \frac{10}{x^4}} = \frac{(1+0)^4}{1+0+0+0} = 1 \end{aligned}$$

$\lim_{x \rightarrow -\infty} f(x)$ has the same steps and answer so $y = 1$ is the horizontal asymptote on both sides.

(b) $f(x) = \frac{x+3}{x^2 + 8x + 26}$

Solution:

$$\begin{aligned} \lim_{x \rightarrow \infty} f(x) &= \lim_{x \rightarrow \infty} \frac{x+3}{x^2 + 8x + 26} = \lim_{x \rightarrow \infty} \frac{\frac{x+3}{x^2}}{\frac{x^2 + 8x + 26}{x^2}} \\ &= \lim_{x \rightarrow \infty} \frac{\frac{x}{x^2} + \frac{3}{x^2}}{\frac{x^2}{x^2} + \frac{8x}{x^2} + \frac{26}{x^2}} = \lim_{x \rightarrow \infty} \frac{\frac{1}{x} + \frac{3}{x^2}}{1 + \frac{8}{x} + \frac{26}{x^2}} = \frac{0+0}{1+0+0} = 0 \end{aligned}$$

$\lim_{x \rightarrow -\infty} f(x)$ has the same steps and answer so $y = 0$ is the horizontal asymptote on both sides.

(c) $f(x) = \frac{x^3 + 4x + 9}{x^2 + 4}$

Solution:

$$\begin{aligned} \lim_{x \rightarrow \infty} f(x) &= \lim_{x \rightarrow \infty} \frac{x^3 + 4x + 9}{x^2 + 4} = \lim_{x \rightarrow \infty} \frac{\frac{x^3 + 4x + 9}{x^3}}{\frac{x^2 + 4}{x^3}} \\ &= \lim_{x \rightarrow \infty} \frac{\frac{x^3}{x^3} + \frac{4x}{x^3} + \frac{9}{x^3}}{\frac{x^2}{x^3} + \frac{4}{x^3}} = \lim_{x \rightarrow \infty} \frac{1 + \frac{4}{x^2} + \frac{9}{x^3}}{\frac{1}{x} + \frac{4}{x^3}} = \infty \end{aligned}$$

The other limit has similar steps:

$$\lim_{x \rightarrow -\infty} \frac{x^3 + 4x + 9}{x^2 + 4} = \dots = \lim_{x \rightarrow -\infty} \frac{1 + \frac{4}{x^2} + \frac{9}{x^3}}{\frac{1}{x} + \frac{4}{x^3}} = -\infty$$

because the denominator now is taking negative values with $x \rightarrow -\infty$. The graph of this function has no horizontal asymptotes.

(d) $f(x) = -7x^4 + x^3 - 12x + 20$

Solution:

$$\lim_{x \rightarrow \infty} f(x) = \lim_{x \rightarrow \infty} -7x^4 + x^3 - 12x + 20 = -\infty$$

and

$$\lim_{x \rightarrow -\infty} f(x) = \lim_{x \rightarrow -\infty} -7x^4 + x^3 - 12x + 20 = -\infty$$

The graph of this function has no horizontal asymptotes.

(e) $f(x) = \frac{\sqrt{8x^2 + 4}}{x + 2}$

Solution:

$$\begin{aligned} \lim_{x \rightarrow \infty} f(x) &= \lim_{x \rightarrow \infty} \frac{\sqrt{8x^2 + 4}}{x + 2} = \lim_{x \rightarrow \infty} \frac{\frac{\sqrt{8x^2 + 4}}{x}}{\frac{x+2}{x}} = \lim_{x \rightarrow \infty} \frac{\frac{\sqrt{8x^2 + 4}}{\sqrt{x^2}}}{\frac{x+2}{x}} \\ &= \lim_{x \rightarrow \infty} \frac{\sqrt{\frac{8x^2 + 4}{x^2}}}{\frac{x+2}{x}} = \lim_{x \rightarrow \infty} \frac{\sqrt{\frac{8x^2}{x^2} + \frac{4}{x^2}}}{\frac{x}{x} + \frac{2}{x}} = \lim_{x \rightarrow \infty} \frac{\sqrt{8 + \frac{4}{x^2}}}{1 + \frac{2}{x}} = \sqrt{8} \end{aligned}$$

Now for the next one look carefully to see where the difference in steps is:

$$\begin{aligned} \lim_{x \rightarrow -\infty} f(x) &= \lim_{x \rightarrow -\infty} \frac{\sqrt{8x^2 + 4}}{x + 2} = \lim_{x \rightarrow -\infty} \frac{\frac{\sqrt{8x^2 + 4}}{x}}{\frac{x+2}{x}} = \lim_{x \rightarrow -\infty} \frac{\frac{\sqrt{8x^2 + 4}}{-\sqrt{x^2}}}{\frac{x+2}{x}} \\ &= \lim_{x \rightarrow -\infty} \frac{-\sqrt{\frac{8x^2 + 4}{x^2}}}{\frac{x+2}{x}} = - \lim_{x \rightarrow -\infty} \frac{\sqrt{\frac{8x^2}{x^2} + \frac{4}{x^2}}}{\frac{x}{x} + \frac{2}{x}} = - \lim_{x \rightarrow -\infty} \frac{\sqrt{8 + \frac{4}{x^2}}}{1 + \frac{2}{x}} = -\sqrt{8} \end{aligned}$$

When you use $\sqrt{x^2} = x$ you have to be careful because it is ONLY true when $x \geq 0$! If $x < 0$ (in this case $x \rightarrow -\infty$) we have $\sqrt{x^2} = -x$. Try $x = -3$, for example.

So this function has two horizontal asymptotes: The graph approaches $y = \sqrt{8}$ on the right as $x \rightarrow \infty$ and it approaches $y = -\sqrt{8}$ on the left as $x \rightarrow -\infty$.

(f) $f(x) = 3e^x$

Solution:

$$\lim_{x \rightarrow \infty} f(x) = \lim_{x \rightarrow \infty} 3e^x = \infty$$

and

$$\lim_{x \rightarrow -\infty} f(x) = \lim_{x \rightarrow -\infty} 3e^x = 0$$

The graph has $y = 0$ as a horizontal asymptote on the left side only.

(g) $f(x) = 7 - e^{-x}$

Solution:

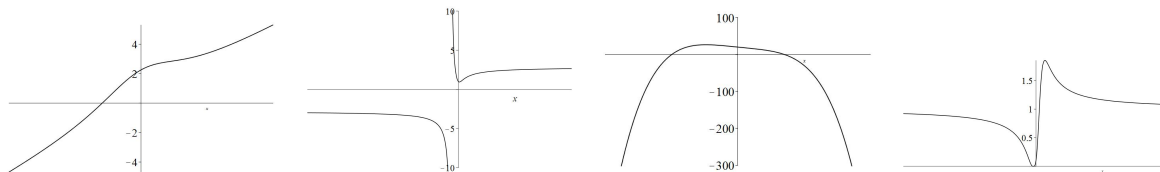
$$\lim_{x \rightarrow \infty} f(x) = \lim_{x \rightarrow \infty} 7 - e^{-x} = 7 - 0 = 7$$

and

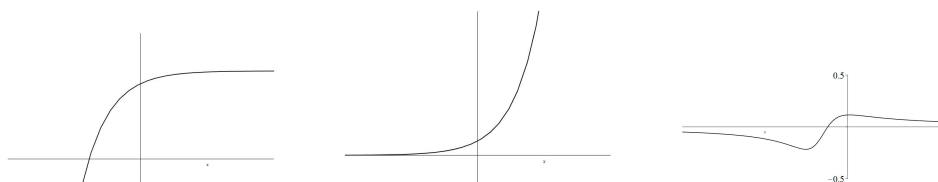
$$\lim_{x \rightarrow -\infty} f(x) = \lim_{x \rightarrow -\infty} 7 - e^{-x} = -\infty$$

The graph has $y = 7$ as a horizontal asymptote on the right side only.

When you match the functions with these graphs, add (if any) horizontal asymptotes to the pictures.



$$y = \frac{x^3 + 4x + 9}{x^2 + 4} \quad y = \frac{\sqrt{8x^2 + 4}}{x + 2} \quad y = -7x^4 + x^3 - 12x + 20 \quad y = \frac{(x + 1)^4}{x^4 + 3x^2 + 7x + 10}$$



$$y = 7 - e^{-x}$$

$$y = 3e^x$$

$$y = \frac{x + 3}{x^2 + 8x + 26}$$